




Minusaufgaben

Analogieaufgaben



Ich lege einen Zehner dazu.



- 1 $4 - 2 = 2$ $7 - 5 = \underline{\quad}$ $9 - 6 = \underline{\quad}$ $6 - 3 = \underline{\quad}$
 $14 - 2 = \underline{\quad}$ $17 - 5 = \underline{\quad}$ $19 - 6 = \underline{\quad}$ $16 - 3 = \underline{\quad}$
- $9 - 4 = \underline{\quad}$ $8 - 7 = \underline{\quad}$ $10 - 2 = \underline{\quad}$ $3 - 3 = \underline{\quad}$
 $19 - 4 = \underline{\quad}$ $18 - 7 = \underline{\quad}$ $20 - 2 = \underline{\quad}$ $13 - 3 = \underline{\quad}$

2

-	2	4	3
5	3		
15	13		

-	7	5	8
9			
19			

-	7	4	3
7			
17			

0 1 1 2 2 ~~3~~ 3 4 4 8 10 11 11 12 12 ~~13~~ 13 14 14

- 3 $7 - 6 = \underline{\quad}$ $7 - 2 = \underline{\quad}$ $4 - 4 = \underline{\quad}$
 $17 - 6 = \underline{\quad}$ $\underline{\quad} - \underline{\quad} = \underline{\quad}$ $\underline{\quad} - \underline{\quad} = \underline{\quad}$
- $8 - 5 = \underline{\quad}$ $6 - 4 = \underline{\quad}$ $8 - 8 = \underline{\quad}$
 $\underline{\quad} - \underline{\quad} = \underline{\quad}$ $\underline{\quad} - \underline{\quad} = \underline{\quad}$ $\underline{\quad} - \underline{\quad} = \underline{\quad}$

- 4 $\underline{\quad} - \underline{\quad} = \underline{\quad}$ $\underline{\quad} - \underline{\quad} = \underline{\quad}$ $\underline{\quad} - \underline{\quad} = \underline{\quad}$
 $\underline{\quad} - \underline{\quad} = \underline{\quad}$ $\underline{\quad} - \underline{\quad} = \underline{\quad}$ $\underline{\quad} - \underline{\quad} = \underline{\quad}$