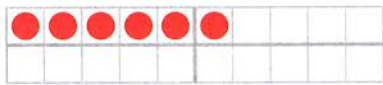


Übungsblatt - Verdoppeln und < > =


Verdopple.




$$_ + _ = _$$



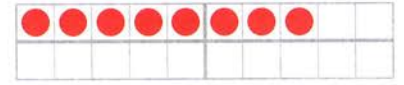
$$5 + 5 = _$$




$$_ + _ = _$$



$$4 + 4 = _$$



$$_ + _ = _$$



$$9 + 9 = _$$

Zahl	3	5		7		6	10		9	8	
das Doppelte			8		4			2			0

V	Z	N
	9	
	19	

V	Z	N
		3
		13

V	Z	N
0		
10		

V	Z	N
17		
		20

<, > oder =?

- | | | | | |
|---------|---------|---------|---------|---------|
| 0 ○ 1 | 4 ○ 8 | 15 ○ 5 | 20 ○ 18 | 6 ○ 16 |
| 10 ○ 10 | 16 ○ 14 | 13 ○ 18 | 19 ○ 19 | 16 ○ 6 |
| 11 ○ 9 | 13 ○ 10 | 7 ○ 10 | 2 ○ 20 | 16 ○ 16 |

7 1 4

___ < ___ < ___

13 19 8

___ < ___ < ___

20 0 10

___ > ___ > ___